



THIRD SPACE
LEARNING

Fluent in Five

Questions and Answers

Year 2

Week 18

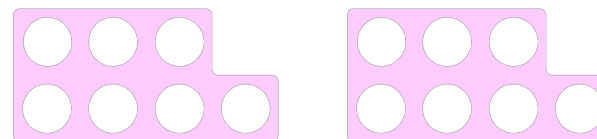
Year 2 – Week 18

This week in a nutshell:

As with last week, the focus of Fluent in Five remains on addition and subtraction. Children will continue to be exposed to a range of increasingly more complex addition and subtraction questions, including addition questions which involve exchanging.

As usual, children will also continue to face questions which cover the full range of Year 2 addition, subtraction, multiplication, division and fractions.

A. $7 \times 2 =$



B. $28 + 28 =$

You choose...

...what to use...

...to help you

C. $90 - 5 =$

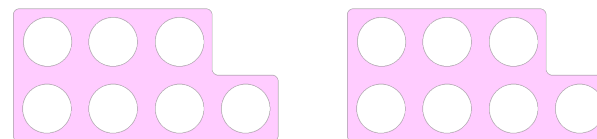
Use...



Base 10

...to help you

$$A. 7 \times 2 = 14$$



$$B. 28 + 28 = 56$$


You choose...

...what to use...

...to help you

$$C. 90 - 5 = 85$$

Use...



Base 10

...to help you

Fluent in Five

Questions and Answers

Week 18

Day 2



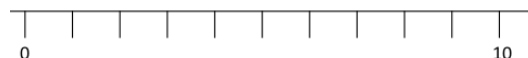
THIRD SPACE
LEARNING

Year 2

Week 18 – Day 2

A. $77 - 25 =$


Use...



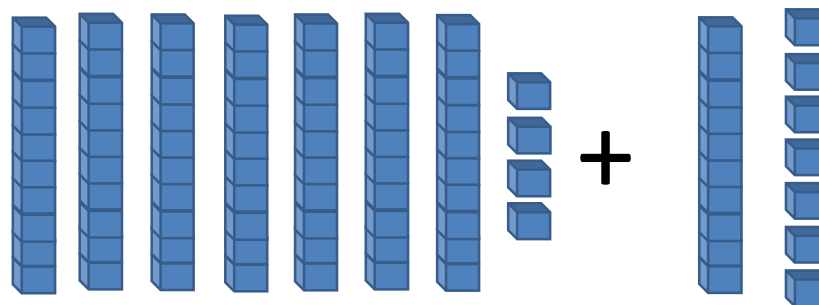
A number line

...to help you

B. $55 \div 11 =$



C. $74 + 17 =$





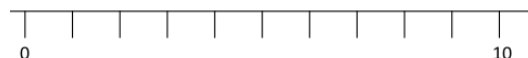
THIRD SPACE
LEARNING

Year 2

Week 18 – Day 2 (Answers)

$$A. 77 - 25 = 52$$


Use...



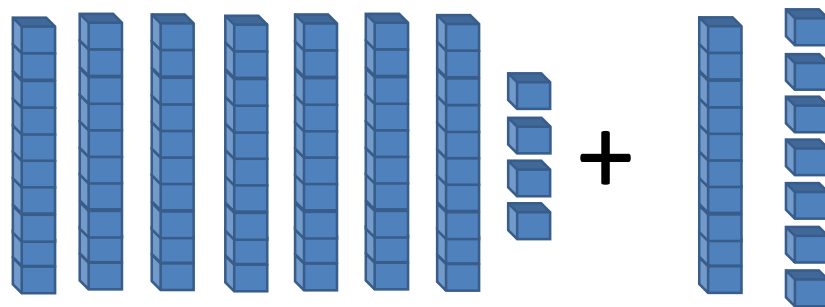
A number line

...to help you

$$B. 55 \div 11 = 5$$



$$C. 74 + 17 = 91$$



Fluent in Five

Questions and Answers

Week 18

Day 3



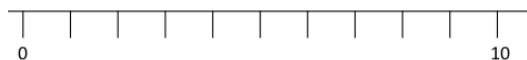
THIRD SPACE
LEARNING

Year 2

Week 18 – Day 3

$$A. 88 - 58 =$$

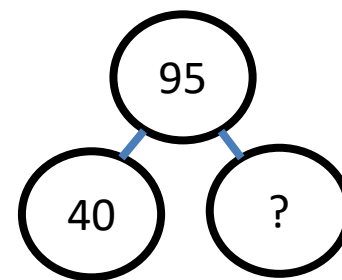
Use...



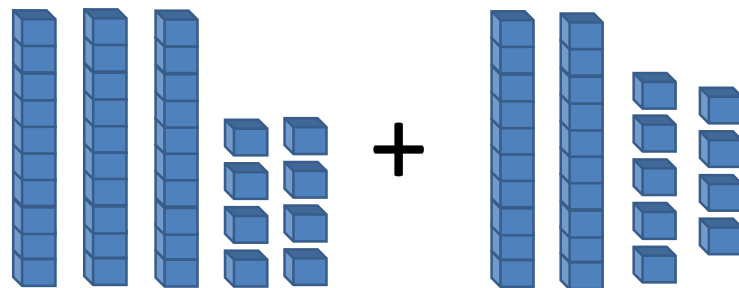
A number line

...to help you

$$B. 95 - ? = 40$$



$$C. 38 + 29 =$$





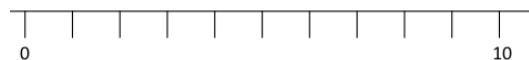
THIRD SPACE
LEARNING

Year 2

Week 18 – Day 3 (Answers)

$$A. 88 - 58 = 30$$

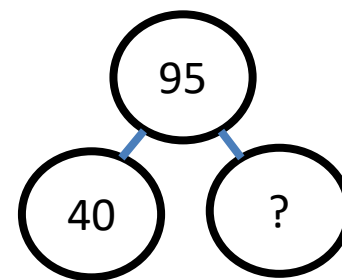
Use...



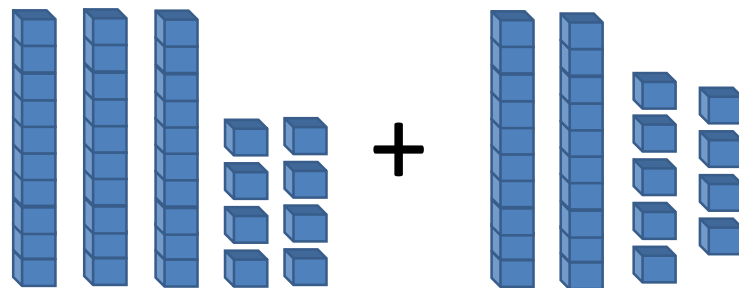
A number line

...to help you

$$B. 95 - 55 = 40$$



$$C. 38 + 29 = 67$$




Fluent in Five

Questions and Answers

Week 18

Day 4


A. $10 + 6 + 4 =$



+



+




B. $100 \div 10 =$

You choose...

...what to use...

...to help you

C. $\frac{3}{4}$ of 20 =






THIRD SPACE
LEARNING

Year 2

Week 18 – Day 4 (Answers)


$$A. 10 + 6 + 4 = 20$$



+



+




$$B. 100 \div 10 = 10$$

You choose...

...what to use...

...to help you

$$C. \frac{3}{4} \text{ of } 20 = 15$$



Fluent in Five

Questions and Answers

Week 18

Day 5

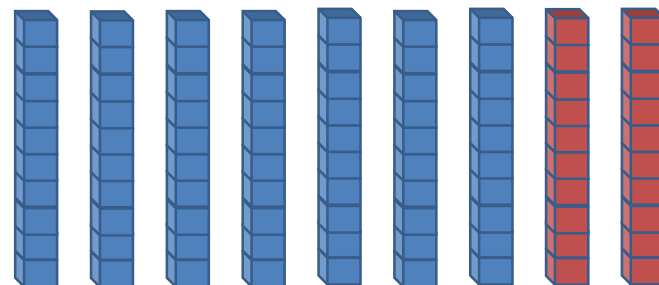


THIRD SPACE
LEARNING

Year 2

Week 18 – Day 5

A. $90 - 20 =$

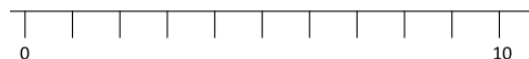


B. $\frac{2}{4}$ of 8 =



C. $48 + 27 =$

Use...



A number line

...to help you

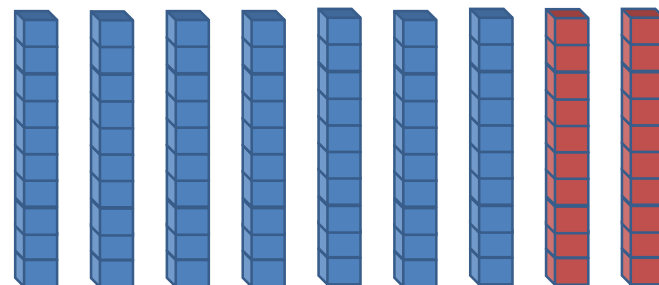


THIRD SPACE
LEARNING

Year 2

Week 18 – Day 5 (Answers)

$$A. 90 - 20 = 70$$

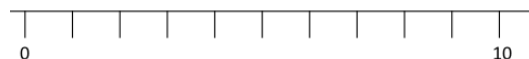


$$B. \frac{2}{4} \text{ of } 8 = 4$$



$$C. 48 + 27 = 75$$

Use...



A number line

...to help you