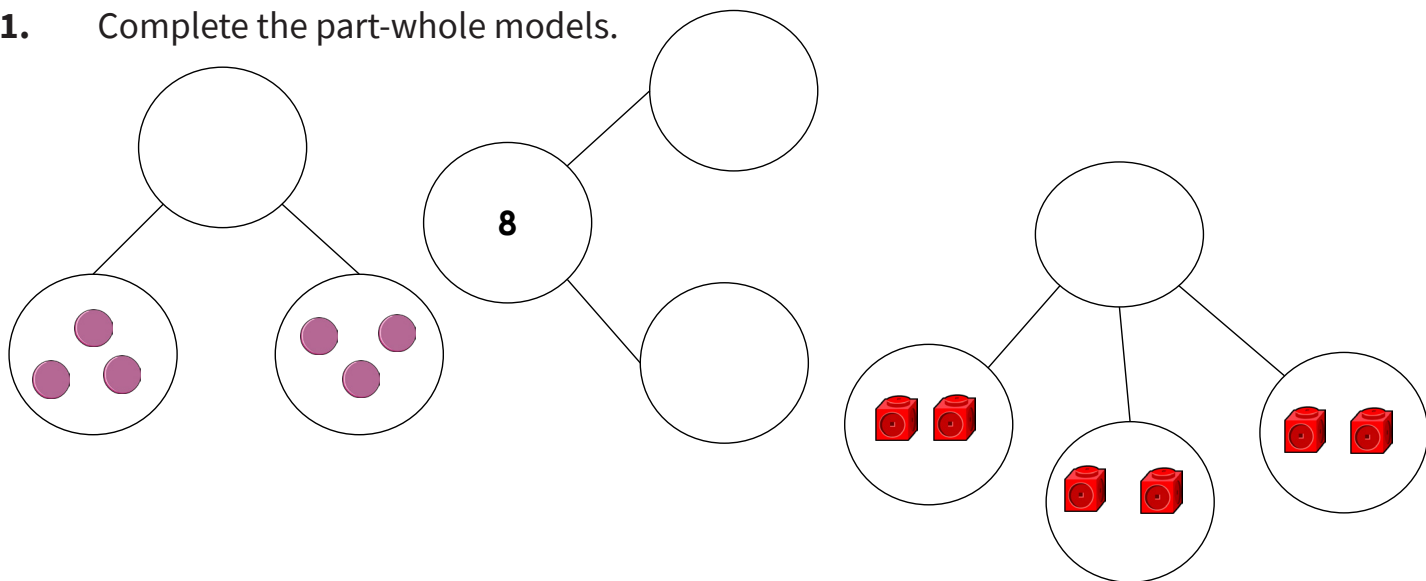



To use the part-whole model - Questions

1. Complete the part-whole models.



2. Here are 8 treats.

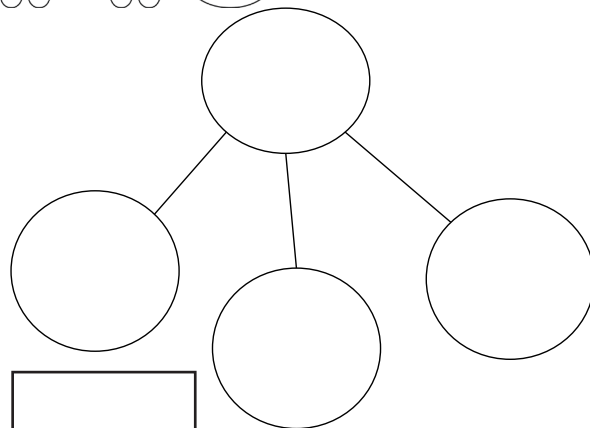


Put the treats into a part-whole model.

Complete the sentences.

is the whole.

is a part, is a part and is a part.

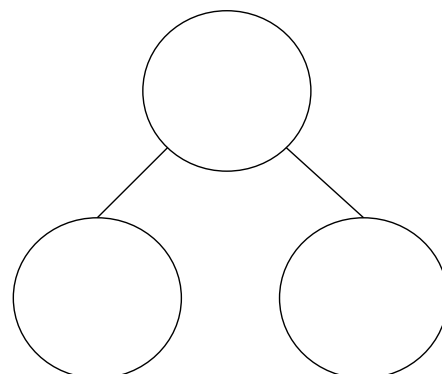


3. Draw the part-whole model that represents the stem sentences:

A part is 4.

A part is 5.

The whole is 9.



To use the part-whole model - Answers

Question No.	Question	Answer
1	Complete the part-whole models.	a. 6 b. Multiple answers e.g. 8 and 0, 7 and 1, 6 and 2 c. 8
2	a. Put the treats into a part-whole model. b. ____ is the whole. ____ is a part, ____ is a part and ____ is a part.	a. 8 is the whole. b. 4 is a part (gingerbread men), 3 is a part (doughnuts) and 1 is a part (cupcake).
3	Draw the part-whole model that represents the stem sentences.	Part-whole model shows 9 as the whole and 4 and 5 as the parts.