

Fluent in Five

Questions and Answers

Year 2

Week 31

Year 2 – Week 31

This week in a nutshell:

As children are now approaching the time of the Key Stage 1 assessments, Five Fluent in Five will focus on the full range of questions from the Key Stage 1 curriculum. Therefore, questions covering addition, subtraction, multiplication, division and fractions will be present throughout the week. As with last week, there will be a specific focus on more complex multiplication and division.

A. $\frac{1}{4}$ of 40 =

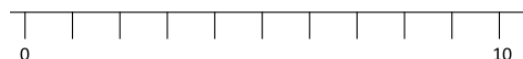
You choose...

...what to use...

...to help you

B. $37 + 28 =$


Use...



A number line

...to help you

C. $5 \times 9 =$





THIRD SPACE
LEARNING

Year 2

Week 31 – Day 1 (Answers)

$$A. \frac{1}{4} \text{ of } 40 = 10$$

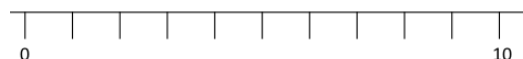
You choose...

...what to use...

...to help you

$$B. 37 + 28 = 65$$


Use...



A number line

...to help you

$$C. 5 \times 9 = 45$$



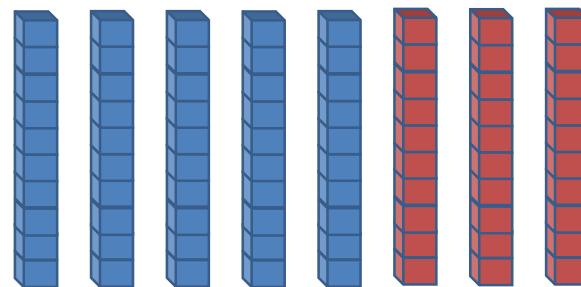
Fluent in Five

Questions and Answers

Week 31

Day 2

A. $80 - 30 =$



B. $\frac{1}{4}$ of 8 =

Use...



Counters

...to help you

C. $8 + 10 =$

You choose...

...what to use...

...to help you

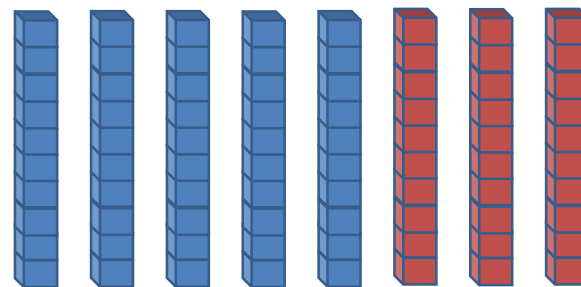


THIRD SPACE
LEARNING

Year 2

Week 31 – Day 2 (Answers)

$$A. 80 - 30 = 50$$



$$B. \frac{1}{4} \text{ of } 8 = 2$$

Use...



Counters

...to help you

$$C. 8 + 10 = 18$$

You choose...

...what to use...

...to help you

Fluent in Five

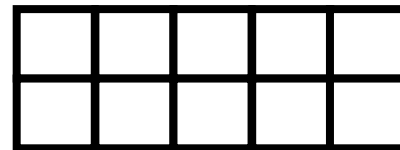
Questions and Answers

Week 31

Day 3

A. $18 - 2 =$


Use...



Tens Frames

...to help you

B. $9 \times ? = 18$



You choose...

C. $57 + 29 =$

...what to use...

...to help you



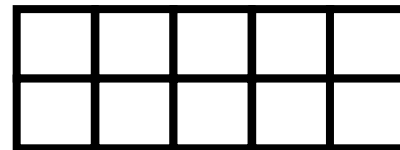
THIRD SPACE
LEARNING

Year 2

Week 31 – Day 3 (Answers)

$$A. 18 - 2 = 16$$


Use...



Tens Frames

...to help you

$$B. 9 \times 2 = 18$$



You choose...

$$C. 57 + 29 = 86$$

...what to use...

...to help you

Fluent in Five

Questions and Answers

Week 31

Day 4

A. $3 + 4 + 2 =$

Use...



Number shapes

...to help you

B. $30 \div 5 =$



You choose...

C. $83 - 29 =$

...what to use...

...to help you

$$A. 3 + 4 + 2 = 9$$


Use...



Number shapes

...to help you

$$B. 30 \div 5 = 6$$



You choose...

$$C. 83 - 29 = 54$$

...what to use...

...to help you

Fluent in Five

Questions and Answers

Week 31

Day 5



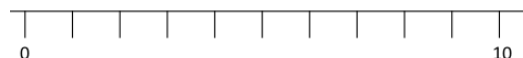
THIRD SPACE
LEARNING

Year 2

Week 31 – Day 5

A. $28 + 32 =$

Use...



A number line

...to help you


B. $\frac{3}{4}$ of 16 =

You choose...

...what to use...

...to help you

C. $5 \times 11 =$





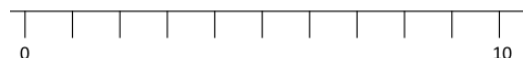
THIRD SPACE
LEARNING

Year 2

Week 31 – Day 5 (Answers)

$$A. 28 + 32 = 60$$

Use...



A number line

...to help you

$$B. \frac{3}{4} \text{ of } 16 = 12$$

You choose...

...what to use...

...to help you

$$C. 5 \times 11 = 55$$

