



THIRD SPACE
LEARNING

Fluent in Five

Questions and Answers

Year 2

Week 36

Year 2 – Week 36

This week in a nutshell:

As this is the last week of Fluent in Five in Key Stage 1, questions will focus on the full range of questions from the Key Stage 1 curriculum, and will help to prepare them for their Key Stage 2 learning. Therefore, questions covering addition, subtraction, multiplication, division and fractions will be present throughout the week.

We hope your children have enjoyed Fluent in Five in Key Stage 1.



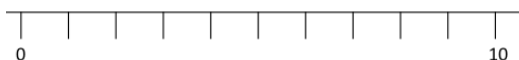
Year 2

Week 36 – Day 1

THIRD SPACE
LEARNING

$$A. 74 - 26 =$$


Use...



A number line

...to help you

$$B. 30 \div 5 =$$



You choose...

$$C. 80 - 30 =$$

...what to use...

...to help you



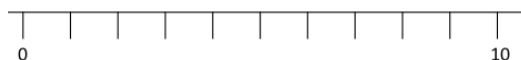
Year 2

Week 36 – Day 1 (Answers)

THIRD SPACE
LEARNING

$$A. 74 - 26 = 48$$


Use...



A number line

...to help you

$$B. 30 \div 5 = 6$$



You choose...

$$C. 80 - 30 = 50$$

...what to use...

...to help you



THIRD SPACE
LEARNING

Fluent in Five

Questions and Answers

Week 36

Day 2



Year 2

Week 36 – Day 2

THIRD SPACE
LEARNING

A. $73 - 29 =$

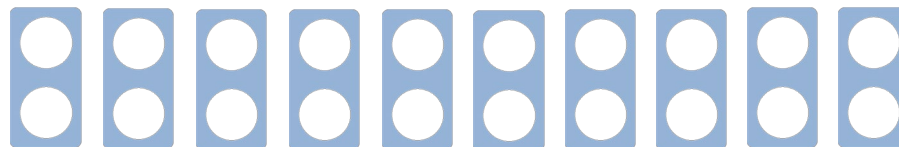
Use...



A number line

...to help you

B. $2 \times ? = 20$



You choose...

C. $\frac{1}{4}$ of 24 =

...what to use...

...to help you



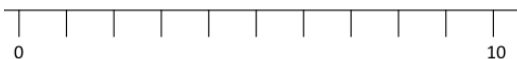
Year 2

Week 36 – Day 2 (Answers)

THIRD SPACE
LEARNING

$$A. 73 - 29 = 44$$

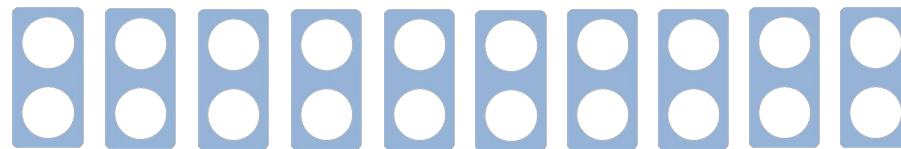
Use...



A number line

...to help you

$$B. 2 \times 10 = 20$$



You choose...

$$C. \frac{1}{4} \text{ of } 24 = 6$$

...what to use...

...to help you



THIRD SPACE
LEARNING

Fluent in Five

Questions and Answers

Week 36

Day 3



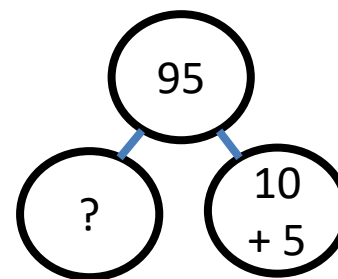
A. $10 + 20 =$

You choose...

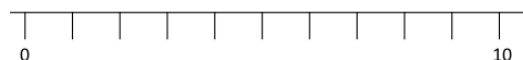
...what to use...

...to help you

B. $? + 15 = 95$



Use...



A number line

C. $34 + 37 =$

...to help you



Year 2

Week 36 – Day 3 (Answers)

THIRD SPACE
LEARNING

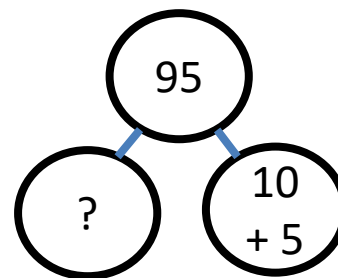
$$A. 10 + 20 = 30$$

You choose...

...what to use...

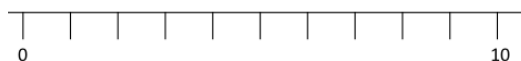
...to help you

$$B. 80 + 15 = 95$$



$$C. 34 + 37 = 71$$

Use...



A number line

...to help you



THIRD SPACE
LEARNING

Fluent in Five

Questions and Answers

Week 36

Day 4




THIRD SPACE
LEARNING

Year 2

Week 36 – Day 4

$$A. 3 + 6 + 5 =$$



You choose...

$$B. 80 \div ? = 8$$

...what to use...

...to help you

$$C. \frac{2}{4} \text{ of } 16 =$$

Use...



Counters

...to help you



THIRD SPACE
LEARNING

Year 2

Week 36 – Day 4 (Answers)

$$A. 3 + 6 + 5 = 14$$



You choose...

$$B. 80 \div 10 = 8$$

...what to use...

...to help you

Use...

$$C. \frac{2}{4} \text{ of } 16 = 8$$



Counters

...to help you



THIRD SPACE
LEARNING

Fluent in Five

Questions and Answers

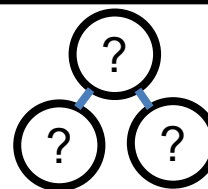
Week 36

Day 5



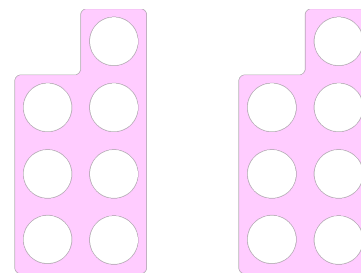
$$A. 70 - ? = 30$$

Use...



Part-Whole Model
...to help you

$$B. 7 \times ? = 14$$



You choose...

$$C. 8 + 11 + 20 =$$

...what to use...

...to help you



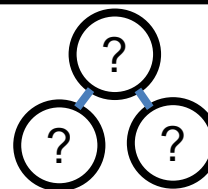
Year 2

Week 36 – Day 5 (Answers)

THIRD SPACE
LEARNING

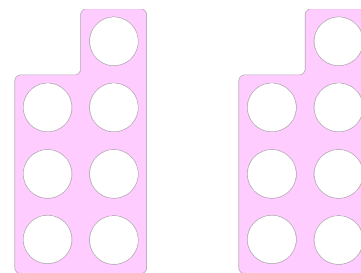
$$A. 70 - 40 = 30$$

Use...



Part-Whole Model
...to help you

$$B. 7 \times 2 = 14$$



You choose...

$$C. 8 + 11 + 20 = 39$$

...what to use...

...to help you