



THIRD SPACE
LEARNING

Fluent in Five

Questions and Answers

Year 2

Week 26

Year 2 – Week 26

This week in a nutshell:

Fluent in Five has now introduced children to the full range of calculations from the Year 2 curriculum. Therefore, the focus of Fluent in Five this week will be on the full range of questions covering addition, subtraction, multiplication, division and fractions. However, there will be a specific focus this week on adding three or more numbers together.



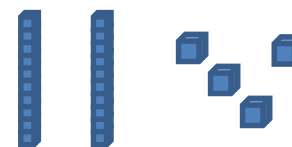
THIRD SPACE
LEARNING

Year 2

Week 26 – Day 1

$$A. 3 + 30 + 3 =$$


Use...



Base 10

...to help you

$$B. 15 \div 3 =$$



You choose...

$$C. 3 \times 10 =$$

...what to use...

...to help you



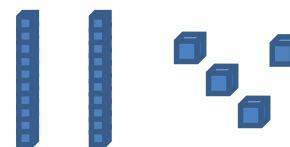
THIRD SPACE
LEARNING

Year 2

Week 26 – Day 1 (Answers)

$$A. 3 + 30 + 3 = 36$$


Use...



Base 10

...to help you

$$B. 15 \div 3 = 5$$



You choose...

$$C. 3 \times 10 = 30$$

...what to use...

...to help you



THIRD SPACE
LEARNING

Fluent in Five

Questions and Answers

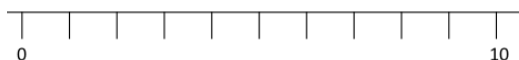
Week 26

Day 2



A. $48 + 33 =$


Use...



A number line

...to help you

B. $\frac{3}{4}$ of 12 =



You choose...

C. $2 + 3 + 12 =$

...what to use...

...to help you



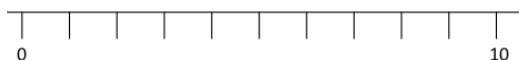
THIRD SPACE
LEARNING

Year 2

Week 26 – Day 2 (Answers)

$$A. 48 + 33 = 81$$


Use...



A number line

...to help you

$$B. \frac{3}{4} \text{ of } 12 = 9$$



You choose...

$$C. 2 + 3 + 12 = 17$$

...what to use...

...to help you



THIRD SPACE
LEARNING

Fluent in Five

Questions and Answers

Week 26

Day 3



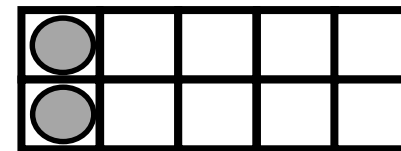
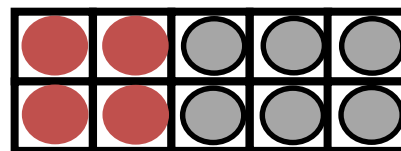
A. $11 \times 5 =$

You choose...

...what to use...

...to help you

B. $12 - ? = 8$



Use...



Number shapes

C. $8 \times 2 =$

...to help you



THIRD SPACE
LEARNING

Year 2

Week 26 – Day 3 (Answers)

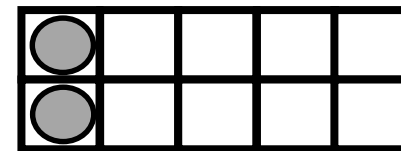
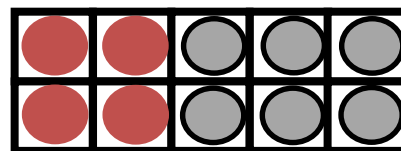
$$A. 11 \times 5 = 55$$

You choose...

...what to use...

...to help you

$$B. 12 - 4 = 8$$



Use...



Number shapes

$$C. 8 \times 2 = 16$$

...to help you



THIRD SPACE
LEARNING

Fluent in Five

Questions and Answers

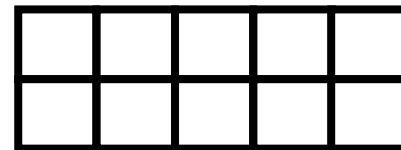
Week 26

Day 4



$$A. 12 - ? = 6$$

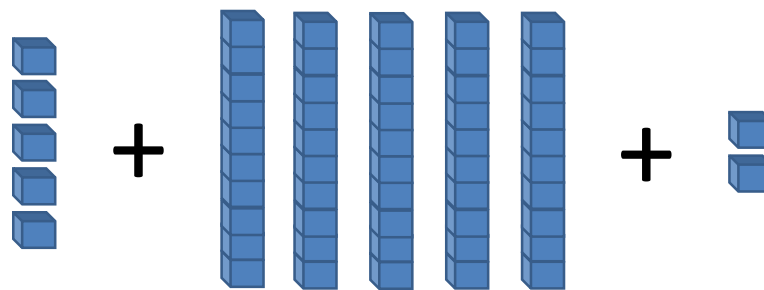
Use...



Tens Frames

...to help you

$$B. 5 + 50 + 2 =$$



You choose...

$$C. 44 + 29 =$$

...what to use...

...to help you



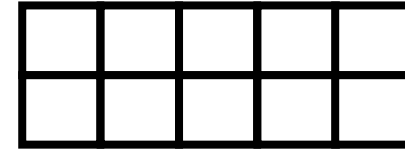
Year 2

Week 26 – Day 4 (Answers)

THIRD SPACE
LEARNING

$$A. 12 - 6 = 6$$

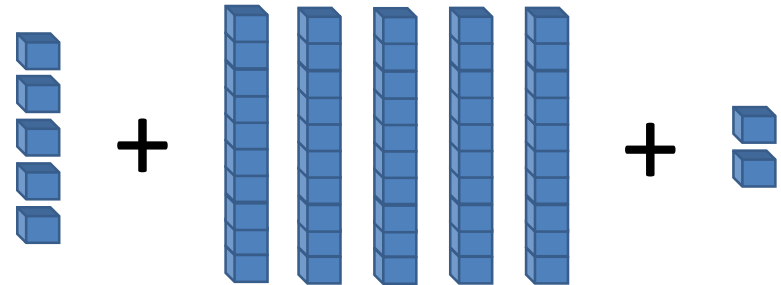
Use...



Tens Frames

...to help you

$$B. 5 + 50 + 2 = 57$$



You choose...

$$C. 44 + 29 = 73$$

...what to use...

...to help you



THIRD SPACE
LEARNING

Fluent in Five

Questions and Answers

Week 26

Day 5

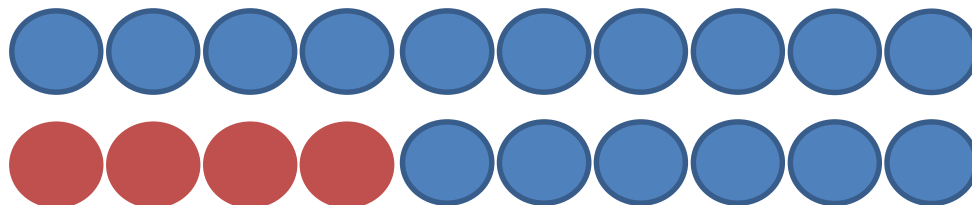


THIRD SPACE
LEARNING

Year 2

Week 26 – Day 5

$$A. 4 + 16 =$$



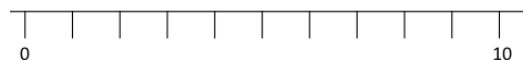
You choose...

$$B. 4 + 50 + 5 =$$

...what to use...

...to help you

Use...



$$C. 56 - 37 =$$

A number line

...to help you

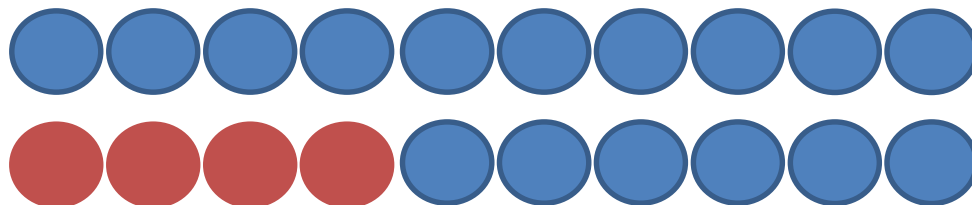


THIRD SPACE
LEARNING

Year 2

Week 26 – Day 5 (Answers)

$$A. 4 + 16 = 20$$



$$B. 4 + 50 + 5 = 59$$

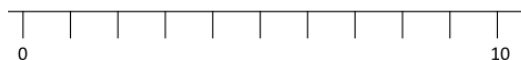
You choose...

...what to use...

...to help you

$$C. 56 - 37 = 19$$

Use...



A number line

...to help you