



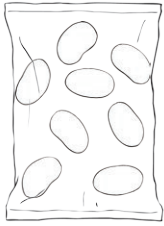





Calculating Totals

I can add amounts of money.



					
lollipop 15p	fizzy sweets 12p	chocolate bar 26p	toffee apple 23p	jelly beans 18p	bag of toffees 33p

1) Calculate total cost of the following items. Show your working out.

a) a chocolate bar and a pack of fizzy sweets.





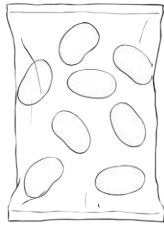

b) a toffee apple and a bag of jelly beans.

c) 2 packs of fizzy sweets and a bar of chocolate.

d) 2 bags of jelly beans and a pack of fizzy sweets.



2) You have 50p to spend on sweets. Do you have enough money to buy the following?
Tick 'Yes' or 'No'. Show your working out.

					
lollipop 15p	fizzy sweets 12p	chocolate bar 26p	toffee apple 23p	jelly beans 18p	bag of toffees 33p

a) a chocolate bar and a pack of fizzy sweets.

yes ☐ no ☐

b) 2 lollipops and a bag of toffees.

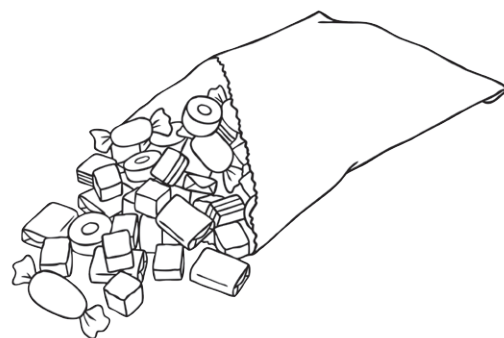
yes ☐ no ☐

c) 2 packs of fizzy sweets and a bag of jelly beans.

yes ☐ no ☐

d) a pack of fizzy sweets and a toffee apple.

yes ☐ no ☐





Calculating Totals **Answers**

Question	Answer
1.	Calculate total cost of the following items. Show your working out.
a.	38p
b.	41p
c.	50p
d.	48p
2.	You have 50p to spend on sweets. Do you have enough money to buy the following? Tick 'Yes' or 'No'. Show your working out.
a.	38p - Yes
b.	63p - No
c.	42p - Yes
d.	35p - Yes