

Fluent in Five

Questions and Answers

Year 2

Week 12

Year 2 – Week 12

This week in a nutshell:

As this is Week 12 of Year 2 Fluent in Five, no new content is introduced this week, with children being exposed to content from throughout the first 12 weeks of challenges.

We hope your children have enjoyed the challenges over the past 12 weeks!



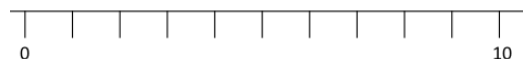
THIRD SPACE
LEARNING

Year 2

Week 12 – Day 1

A. $67 + 25 =$

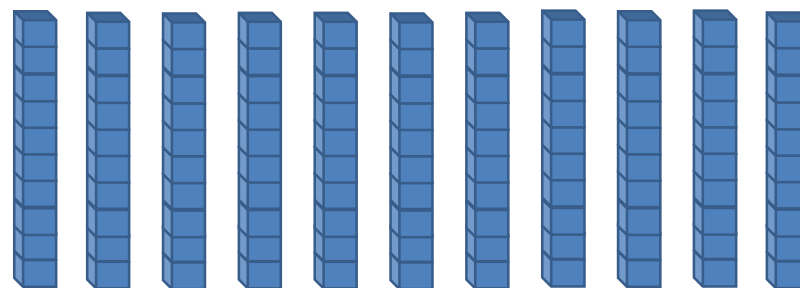
Use...



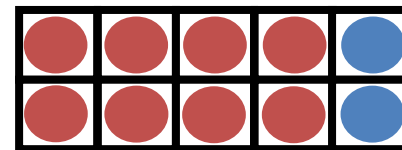
A number line

...to help you

B. $110 \div 10 =$



C. $8 + 2 =$





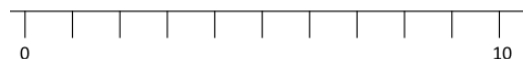
THIRD SPACE
LEARNING

Year 2

Week 12 – Day 1 (Answers)

$$A. 67 + 25 = 92$$

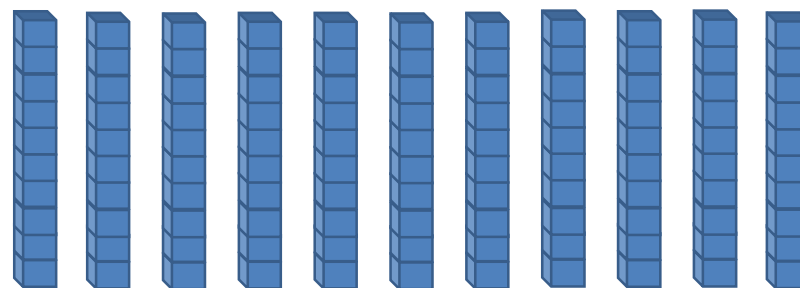
Use...



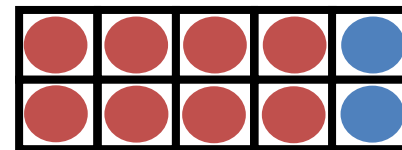
A number line

...to help you

$$B. 110 \div 10 = 11$$



$$C. 8 + 2 = 10$$



Fluent in Five

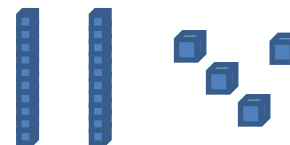
Questions and Answers

Week 12

Day 2

A. $37 + 44 =$

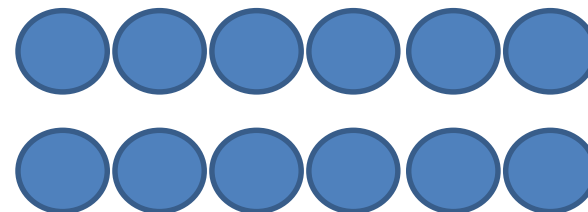
Use...



Base 10

...to help you

B. $\frac{1}{2}$ of 12 =



C. $20 \div 5 =$



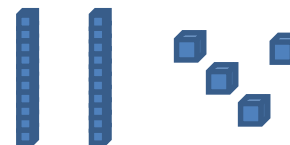


THIRD SPACE
LEARNING

Year 2

Week 12 – Day 2 (Answers)

Use...

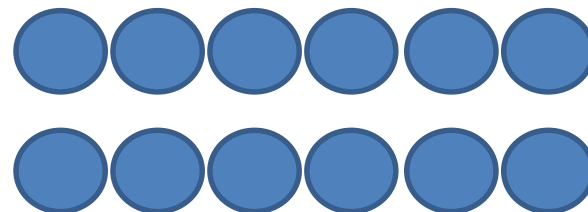


Base 10

...to help you

$$A. 37 + 44 = 81$$

$$B. \frac{1}{2} \text{ of } 12 = 6$$



$$C. 20 \div 5 = 4$$



Fluent in Five

Questions and Answers

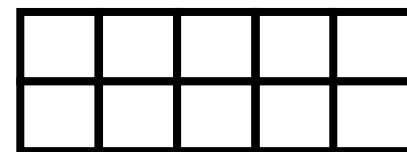
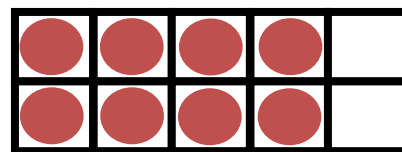
Week 12

Day 3

A. $35 \div 5 =$

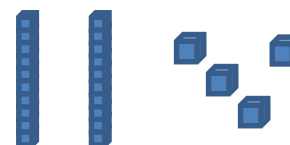


B. $8 + ? = 20$



Use...

C. $11 \times 2 =$



Base 10

...to help you



THIRD SPACE
LEARNING

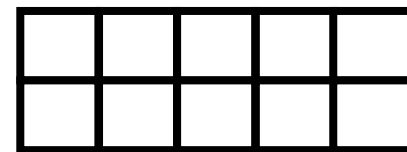
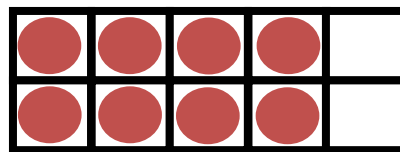
Year 2

Week 12 – Day 3 (Answers)

$$A. 35 \div 5 = 7$$

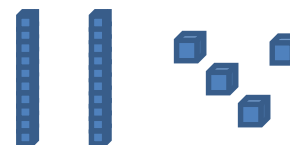


$$B. 8 + 12 = 20$$



Use...

$$C. 11 \times 2 = 22$$



Base 10

...to help you

Fluent in Five

Questions and Answers

Week 12

Day 4



THIRD SPACE
LEARNING

Year 2


Week 12 – Day 4

You choose...

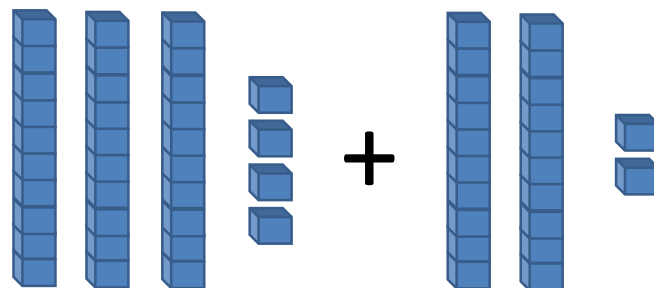
...what to use...

...to help you

$$A. 44 - ? = 11$$



$$B. 50 \div 5 =$$



$$C. 34 + 22 =$$



THIRD SPACE
LEARNING

Year 2


Week 12 – Day 4 (Answers)

You choose...

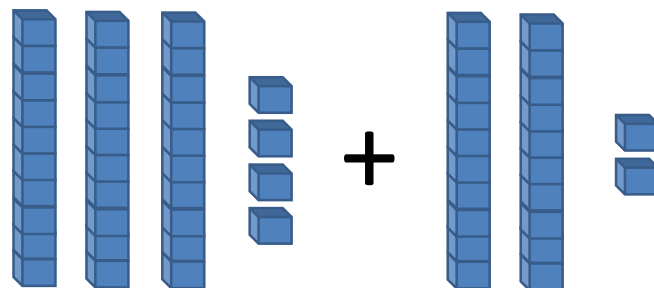
...what to use...

...to help you

$$A. 44 - 33 = 11$$



$$B. 50 \div 5 = 10$$



$$C. 34 + 22 = 56$$

Fluent in Five

Questions and Answers

Week 12

Day 5




THIRD SPACE
LEARNING

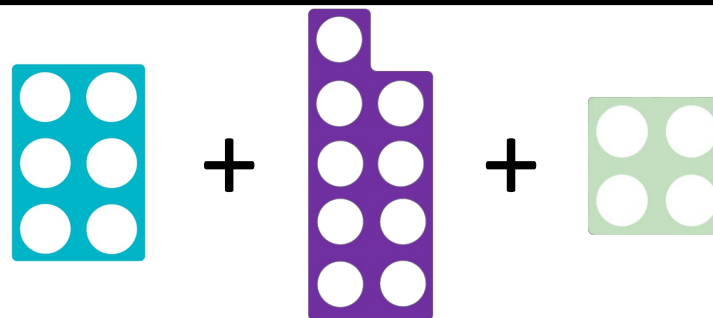
Year 2

Week 12 – Day 5

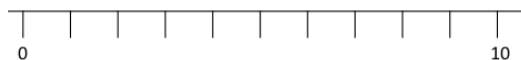
A. $16 \div 2 =$



B. $6 + 9 + 4 =$



Use...



C. $56 + 38 =$

A number line

...to help you




THIRD SPACE
LEARNING

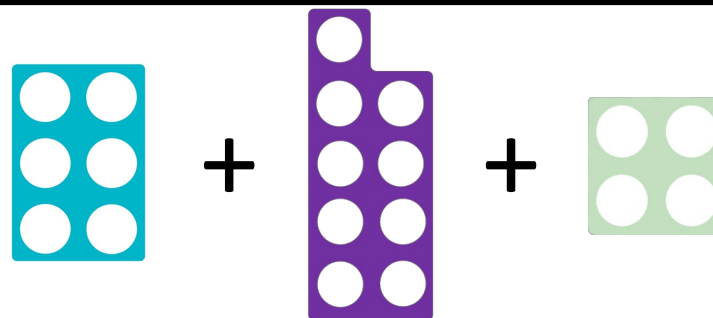
Year 2

Week 12 – Day 5 (Answers)

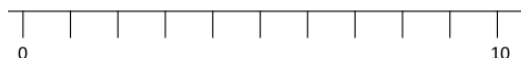
$$A. 16 \div 2 = 8$$



$$B. 6 + 9 + 4 = 19$$



Use...



$$C. 56 + 38 = 94$$

A number line

...to help you