



THIRD SPACE
LEARNING

Fluent in Five

Questions and Answers

Year 2

Week 19

Year 2 – Week 19

This week in a nutshell:

For this week, the focus of Fluent in Five remains on more complex addition and subtraction. Children will therefore continue to be exposed to a range of addition and subtraction questions, including addition questions which involve exchanging.

As usual, children will also continue to face questions which cover the full range of Year 2 addition, subtraction, multiplication, division and fractions.



THIRD SPACE
LEARNING

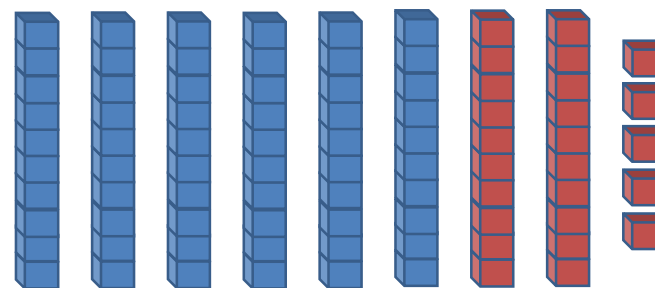
Year 2

Week 19 – Day 1

$$A. 7 \times 2 =$$



$$B. 85 - 25 =$$



You choose...

$$C. 23 + 68 =$$

...what to use...

...to help you




THIRD SPACE
LEARNING

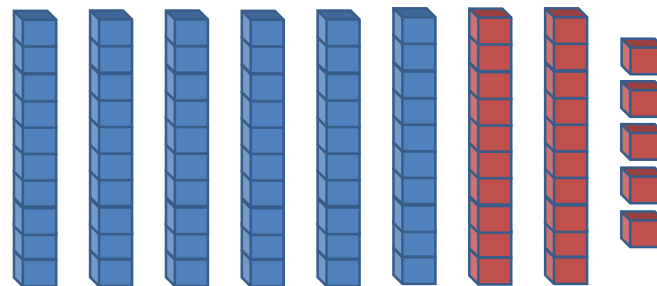
Year 2

Week 19 – Day 1 (Answers)

$$A. 7 \times 2 = 14$$



$$B. 85 - 25 = 60$$



$$C. 23 + 68 = 91$$

You choose...

...what to use...

...to help you

Fluent in Five

Questions and Answers

Week 19

Day 2

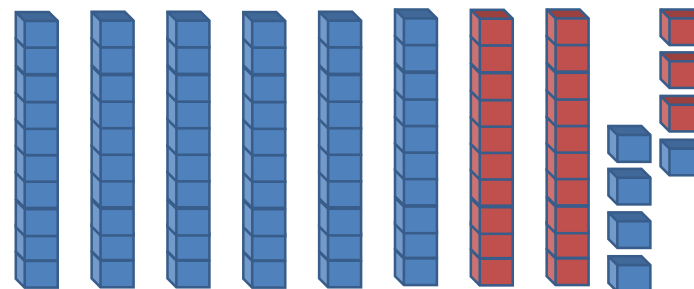


THIRD SPACE
LEARNING

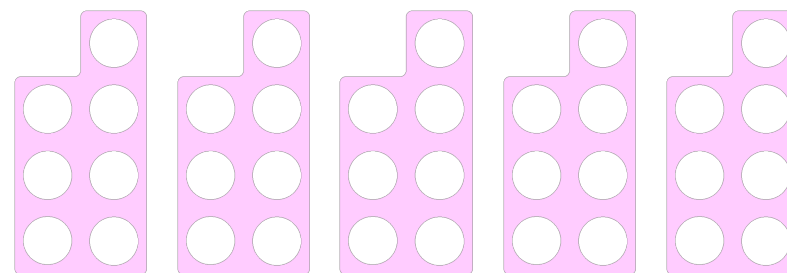
Year 2

Week 19 – Day 2

$$A. 88 - 23 =$$

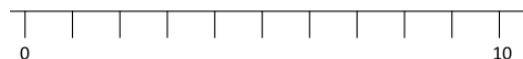


$$B. 7 \times 5 =$$



$$C. 25 + 48 =$$

Use...



A number line

...to help you

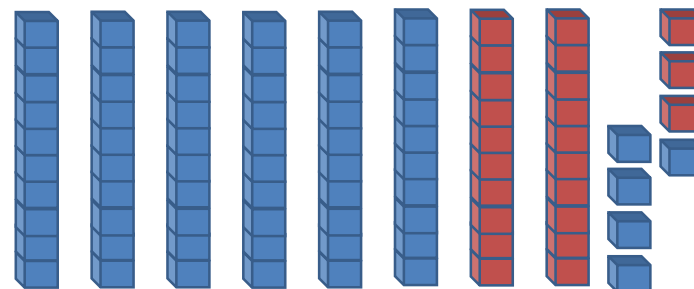


THIRD SPACE
LEARNING

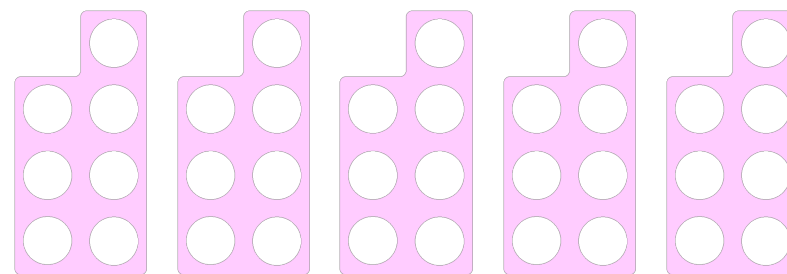
Year 2

Week 19 – Day 2 (Answers)

$$A. 88 - 23 = 65$$

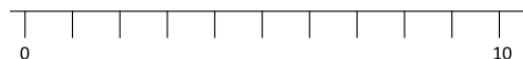


$$B. 7 \times 5 = 35$$



$$C. 25 + 48 = 73$$

Use...



A number line

...to help you

Fluent in Five

Questions and Answers

Week 19

Day 3


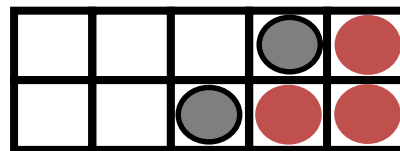


THIRD SPACE
LEARNING

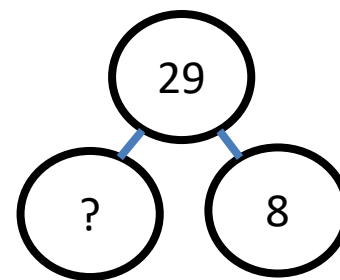
Year 2

Week 19 – Day 3

A. $25 - 12 =$



B. $? + 8 = 29$



Use...

C. $9 \times 2 =$



Number shapes

...to help you


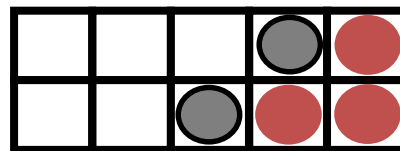


THIRD SPACE
LEARNING

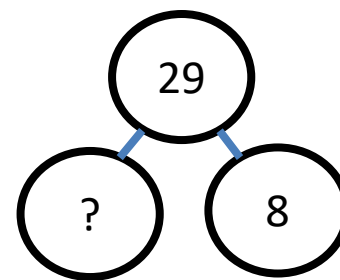
Year 2

Week 19 – Day 3 (Answers)

$$A. 25 - 12 = 13$$



$$B. 21 + 8 = 29$$



Use...

$$C. 9 \times 2 = 18$$



Number shapes

...to help you

Fluent in Five

Questions and Answers

Week 19

Day 4

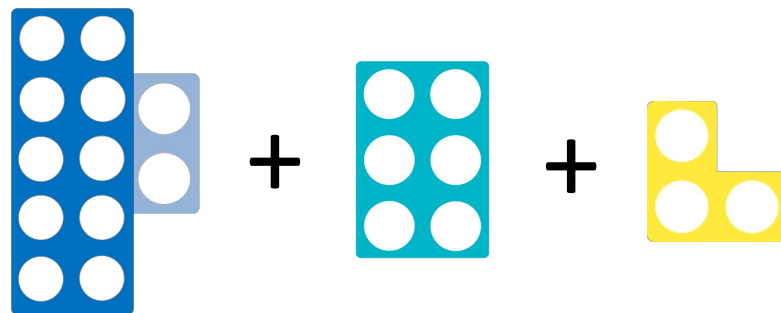


THIRD SPACE
LEARNING

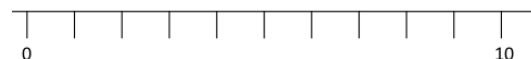
Year 2

Week 19 – Day 4

A. $12 + 6 + 3 =$



Use...




B. $88 - 18 =$

A number line

...to help you

C. $\frac{1}{12}$ of 12 =






THIRD SPACE
LEARNING

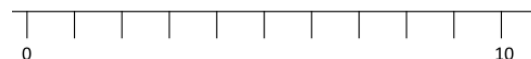
Year 2

Week 19 – Day 4 (Answers)

$$A. 12 + 6 + 3 = 21$$




Use...



A number line

...to help you

$$C. \frac{1}{12} \text{ of } 12 = 1$$



Fluent in Five

Questions and Answers

Week 19

Day 5




THIRD SPACE
LEARNING


Year 2

Week 19 – Day 5

$$A. 90 - 20 =$$

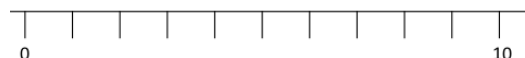


$$B. 9 \times 2 =$$



$$C. 38 + 37 =$$

Use...



A number line

...to help you

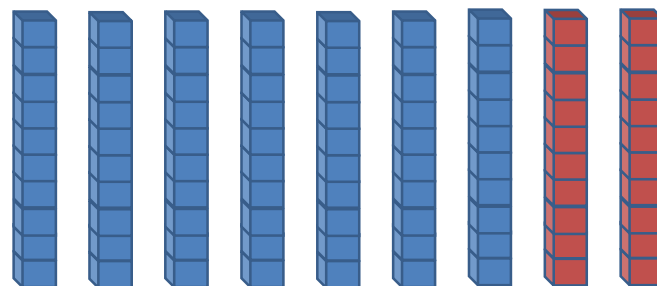


THIRD SPACE
LEARNING


Year 2

Week 19 – Day 5 (Answers)

$$A. 90 - 20 = 70$$

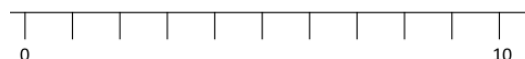


$$B. 9 \times 2 = 18$$



$$C. 38 + 37 = 75$$

Use...



A number line

...to help you