

# Fluent in Five

## Questions and Answers

Year 2

Week 25

## Year 2 – Week 25

### This week in a nutshell:

Welcome to the first week of the last term of Fluent in Five in Year 2

As children have now been introduced to the full range of Key Stage 1 calculations through Fluent in Five, this week questions will be drawn from across the Key Stage 1 curriculum.


A.  $44 + 39 =$

You choose...

...what to use...

...to help you

B.  $\frac{1}{2}$  of 12 =



C.  $3 \times 5 =$

Use...



Number shapes

...to help you



THIRD SPACE  
LEARNING

Year 2

Week 25 – Day 1 (Answers)


$$A. 44 + 39 = 83$$

You choose...

...what to use...

...to help you

$$B. \frac{1}{2} \text{ of } 12 = 6$$



$$C. 3 \times 5 = 15$$

Use...



Number shapes

...to help you

# Fluent in Five

## Questions and Answers

Week 25

Day 2

A.  $\frac{1}{4}$  of 24 =

Use...



Counters

...to help you

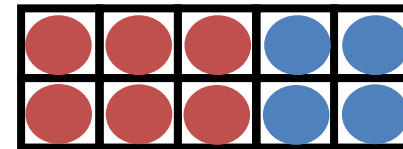
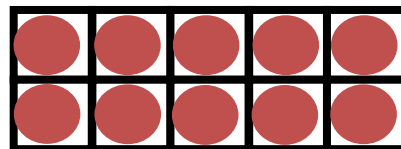
B.  $16 \div 4 =$

You choose...

...what to use...

...to help you

C.  $16 + 4 =$



A.  $\frac{1}{4}$  of 24 = 6

Use...



Counters

...to help you

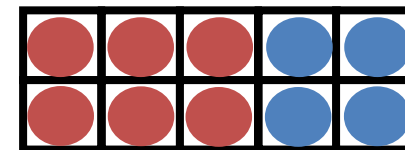
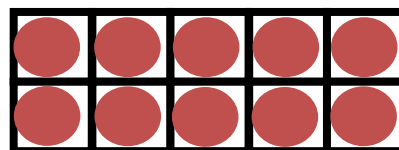
B.  $16 \div 4 = 4$

You choose...

...what to use...

...to help you

C.  $16 + 4 = 20$



# Fluent in Five

## Questions and Answers

Week 25

Day 3





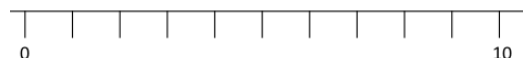
THIRD SPACE  
LEARNING

Year 2

Week 25 – Day 3

A.  $29 + 33 =$

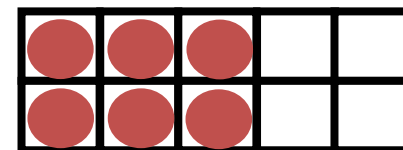
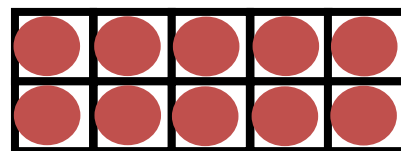
Use...



A number line

...to help you

B.  $16 + ? = 20$



You choose...

C.  $\frac{1}{4}$  of 20 =

...what to use...

...to help you



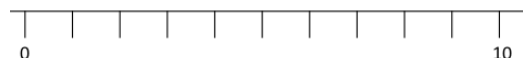
THIRD SPACE  
LEARNING

Year 2

Week 25 – Day 3 (Answers)

$$A. 29 + 33 = 62$$

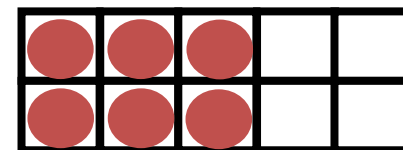
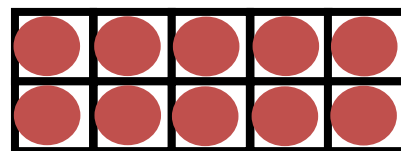
Use...



A number line

...to help you

$$B. 16 + 4 = 20$$



You choose...

$$C. \frac{1}{4} \text{ of } 20 = 5$$

...what to use...

...to help you

# Fluent in Five

## Questions and Answers

Week 25

Day 4



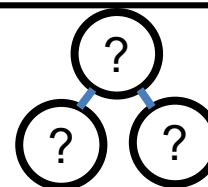
THIRD SPACE  
LEARNING

Year 2

Week 25 – Day 4

$$A. 30 - ? = 10$$

Use...



Part-Whole Model

...to help you

$$B. 10 \div 5 =$$



You choose...

$$C. 4 \times 5 =$$

...what to use...

...to help you



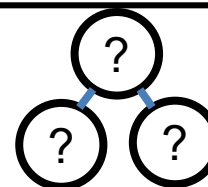
THIRD SPACE  
LEARNING

Year 2

Week 25 – Day 4 (Answers)

$$A. 30 - 20 = 10$$

Use...



Part-Whole Model  
...to help you

$$B. 10 \div 5 = 2$$



You choose...

$$C. 4 \times 5 = 20$$

...what to use...  
...to help you

# Fluent in Five

## Questions and Answers

Week 25

Day 5


A.  $16 + 6 =$

You choose...

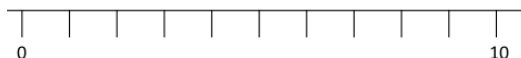
...what to use...

...to help you

B.  $2 \times 10 =$



Use...



C.  $85 - 26 =$

A number line

...to help you



THIRD SPACE  
LEARNING

Year 2

Week 25 – Day 5 (Answers)


$$A. 16 + 6 = 22$$

You choose...

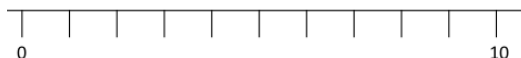
...what to use...

...to help you

$$B. 2 \times 10 = 20$$



Use...



$$C. 85 - 26 = 59$$

A number line

...to help you