

Fluent in Five

Questions and Answers

Year 2

Week 13

Year 2 – Week 13

This week in a nutshell:

Welcome to the new term of Fluent in Five in Year 2.

As this is the first week of the new term, Week 13 no new content is introduced this week, with children being exposed to content from throughout the first 12 weeks in order to recap these skills.



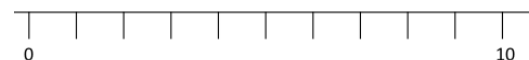
THIRD SPACE
LEARNING

Year 2

Week 13 – Day 1

A. $57 + 35 =$


Use...



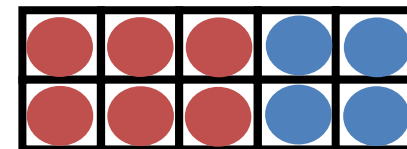
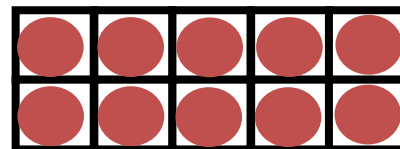
A number line

...to help you

B. $45 \div 5 =$



C. $16 + 4 =$



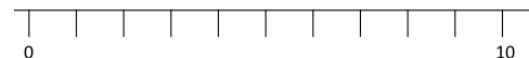


THIRD SPACE
LEARNING

Year 2

Week 13 – Day 1 (Answers)

Use...




A number line

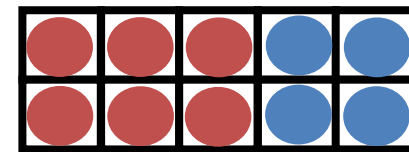
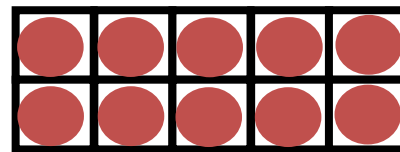
...to help you

$$A. 57 + 35 = 92$$

$$B. 45 \div 5 = 9$$



$$C. 16 + 4 = 20$$



Fluent in Five

Questions and Answers

Week 13

Day 2

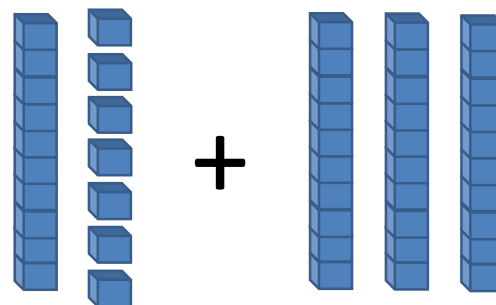


THIRD SPACE
LEARNING

Year 2

Week 13 – Day 2

A. $17 + 30 =$



B. $\frac{1}{2}$ of 6 =



C. $18 \div 2 =$

You choose...

...what to use...

...to help you

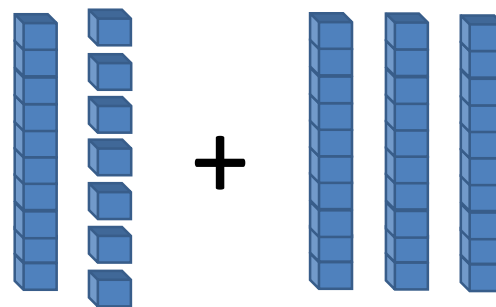


THIRD SPACE
LEARNING

Year 2

Week 13 – Day 2 (Answers)

$$A. 17 + 30 = 47$$



$$B. \frac{1}{2} \text{ of } 6 = 3$$



$$C. 18 \div 2 = 9$$

You choose...

...what to use...

...to help you

Fluent in Five

Questions and Answers

Week 13

Day 3

A. $5 \times 5 =$

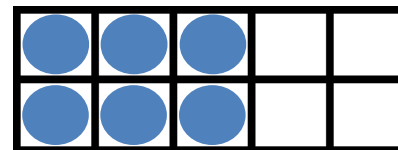
Use...




Number shapes

...to help you

B. $6 + ? = 10$



C. $9 \times 5 =$





THIRD SPACE
LEARNING

Year 2

Week 13 – Day 3 (Answers)

$$A. 5 \times 5 = 25$$

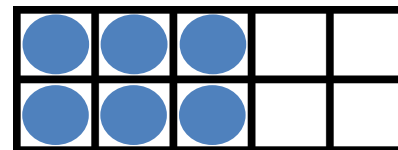
Use...




Number shapes

...to help you

$$B. 6 + 4 = 10$$



$$C. 9 \times 5 = 45$$



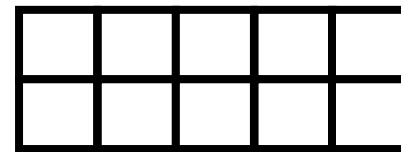
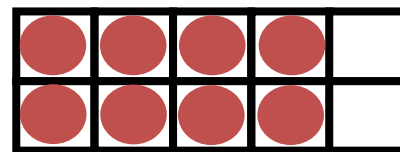
Fluent in Five

Questions and Answers


Week 13

Day 4

A. $8 + ? = 20$



B. $30 \div 5 =$



C. $28 + 43 =$

You choose...

...what to use...

...to help you

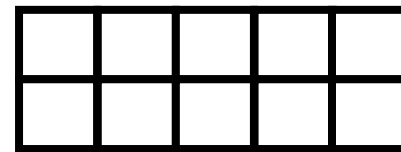
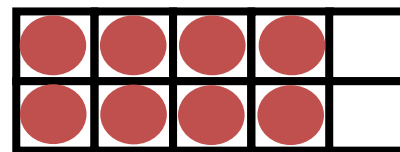


THIRD SPACE
LEARNING


Year 2

Week 13 – Day 4 (Answers)

$$A. 8 + 12 = 20$$



$$B. 30 \div 5 = 6$$



$$C. 28 + 43 = 71$$

You choose...

...what to use...

...to help you

Fluent in Five

Questions and Answers

Week 13

Day 5




THIRD SPACE
LEARNING

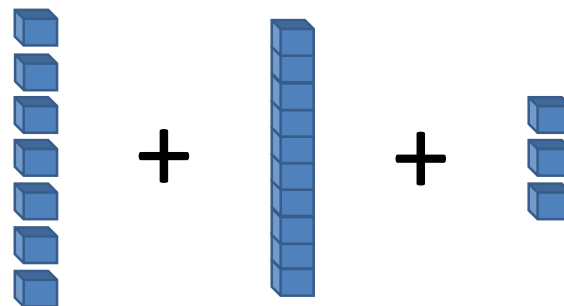
Year 2

Week 13 – Day 5

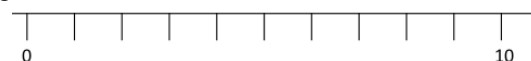
$$A. 20 \div 5 =$$



$$B. 7 + 10 + 3 =$$



Use...



$$C. 55 - 25 =$$

A number line

...to help you




THIRD SPACE
LEARNING

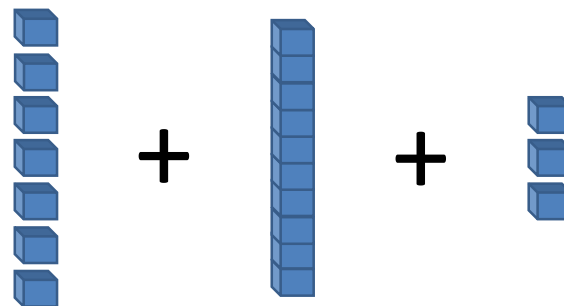
Year 2

Week 13 – Day 5 (Answers)

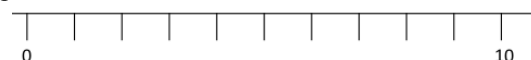
$$A. 20 \div 5 = 4$$



$$B. 7 + 10 + 3 = 20$$



Use...



$$C. 55 - 25 = 30$$

A number line

...to help you